




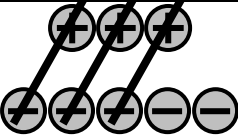

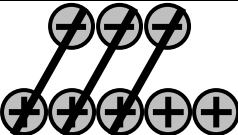
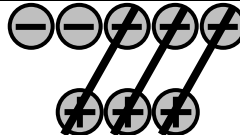






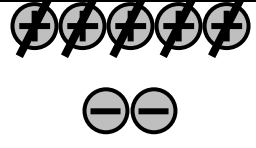

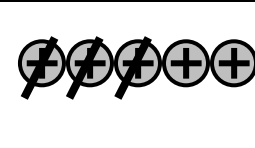
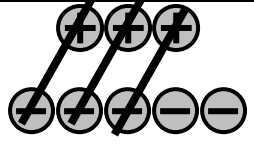

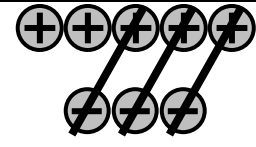

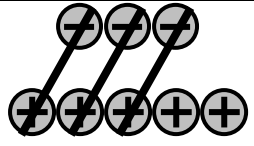
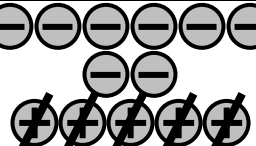
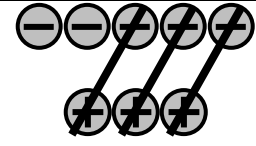
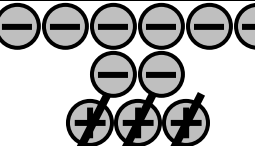
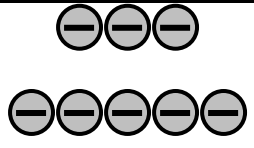
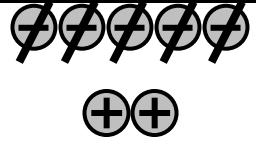
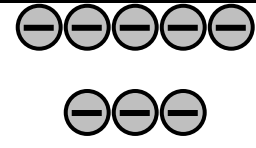
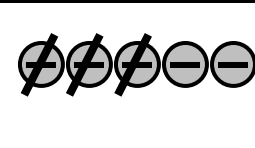


$(+3) + (+5)$	$(+3) - (+5)$	$(+5) + (+3)$	$(+5) - (+3)$
$(+3) + (-5)$	$(+3) - (-5)$	$(+5) + (-3)$	$(+5) - (-3)$
$(-3) + (+5)$	$(-3) - (+5)$	$(-5) + (+3)$	$(-5) - (+3)$
$(-3) + (-5)$	$(-3) - (-5)$	$(-5) + (-3)$	$(-5) - (-3)$

  $(+3) + (+5) = (+8)$	$(+3) - (+5)$	  $(+5) + (+3) = (+8)$	 $(+5) - (+3) = (+2)$
 $(+3) + (-5) = (-2)$	$(+3) - (-5)$	 $(+5) + (-3) = (+2)$	$(+5) - (-3)$
 $(-3) + (+5) = (+2)$	$(-3) - (+5)$	 $(-5) + (+3) = (-2)$	$(-5) - (+3)$
  $(-3) + (-5) = (-8)$	$(-3) - (-5)$	  $(-5) + (-3) = (-8)$	 $(-5) - (-3) = (-2)$

 $(+3) + (+5) = (+8)$	 $(+3) - (+5) = (-2)$	 $(+5) + (+3) = (+8)$	 $(+5) - (+3) = (+2)$
 $(+3) + (-5) = (-2)$	 $(+3) - (-5) = (+8)$	 $(+5) + (-3) = (+2)$	 $(+5) - (-3) = (+8)$
 $(-3) + (+5) = (+2)$	 $(-3) - (+5) = (-8)$	 $(-5) + (+3) = (-2)$	 $(-5) - (+3) = (-8)$
 $(-3) + (-5) = (-8)$	 $(-3) - (-5) = (+2)$	 $(-5) + (-3) = (-8)$	 $(-5) - (-3) = (-2)$