

PRECISE PERIMETERS

TODAY YOU WILL...

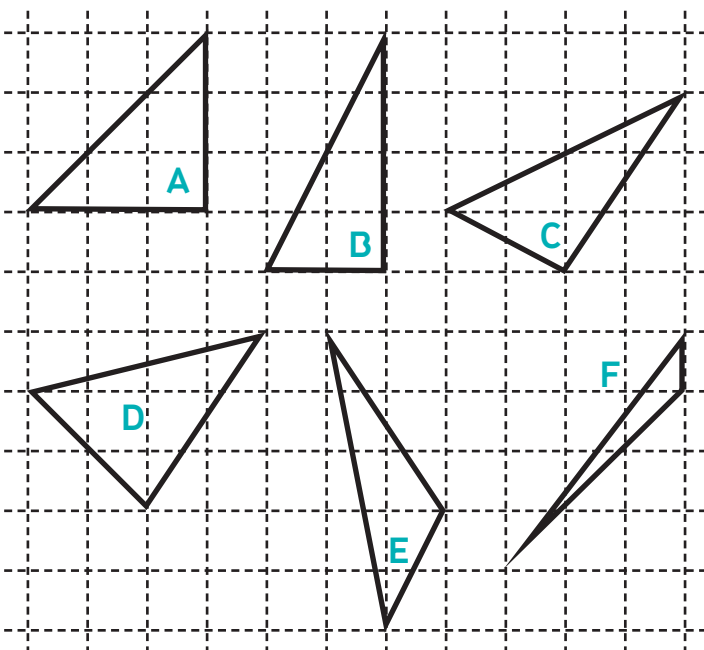
USE CALCULATION TO PUT SOME TRIANGLES IN ORDER OF THEIR PERIMETERS. IT WOULD BE VERY DIFFICULT TO DO THIS BY MEASURING.

Although in everyday life, near enough may be good enough, working with exact quantities can enable learners to experience the real power of mathematics, says **Colin Foster**...

Absolute precision is an aspect of learning mathematics that marks it out as different from any other subject. In this lesson, students use Pythagoras' theorem to find accurate values for the perimeters of some triangles. Although the values of the perimeters are so close that it would be very hard to distinguish them by measurement, mathematics makes it possible to be absolutely sure about the order in which they come.

STARTER ACTIVITY +

Q: Look at these triangles. Can you explain what mathematicians mean by the word 'perimeter'?



Perimeter refers to the distance all the way around the edge of a shape, so for any one of these triangles it is the sum of the lengths of the three sides.

Q: Which one do you think has the **biggest** perimeter? Why? Which one has the **smallest**? Could you put them in order of how big their perimeters are?

Learners could discuss this in pairs. If they have access to mini-whiteboards, they could list the order that they think is right; e.g., $A < B < C < D < E < F$.

Q: Who is confident about their order? Can you give a reason?

It is likely that learners will have very different orders at this stage. They will probably be judging by eye and it should be too difficult for them to be sure that way. If they start arguing about it, that is good, because the rest of the lesson will allow them to resolve the issue.



MAIN ACTIVITIES +

1 MEASURING PERIMETERS

Give learners some squared paper so that they can draw these triangles accurately. (Alternatively, you could photocopy them onto paper for them. If you do, try to make sure that the squares on the photocopy come out accurately as centimetre squares.)

Q: Can you measure the perimeters and find out which one is the biggest, which one is the next biggest, and so on?

Learners will need to measure



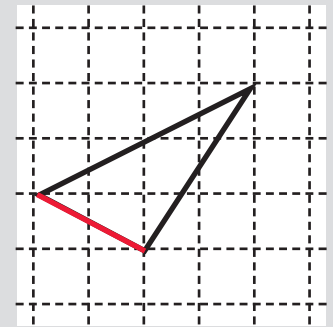
+ KEY RESOURCE



GCSE REVISION CARDS

Set of 48 GCSE FOUNDATION ISBN: 978-0-06588-71-0
 Set of 80 GCSE HIGHER ISBN: 978-0-906588-75-8
 These packs of cards from the Mathematical Association are designed to enable students to master the key facts they need to know for the GCSE mathematics examination. Diagrams and colour are used to make facts clear and memorable. The 'notes' box on the back of each card allows students to personalise the revision aid. The Higher Set contains all the cards in the Foundation Set plus 32 extra cards at the higher level. For more information, visit m-a.org.uk, call 0116 221 0013, or email sales@m-a.org.uk

Q: Choose a side for us to work out first. (e.g., the one marked in red below)



We can see this as the hypotenuse of a 2-by-1 right-angled triangle, so its length must be $\sqrt{2^2 + 1^2} = \sqrt{5}$. Learners may notice that one of the other sides is clearly twice as long as this side, since 4-along-2-up is just twice as much as 2-along-1-up, so its length must be $2\sqrt{5}$ (an even better shortcut is to notice that we have just calculated this same side, in a different orientation, in triangle B!) The remaining side in triangle C needs calculating, and comes to $\sqrt{13}$, giving the perimeter as:

TRIANGLE	PERIMETER
C	$3\sqrt{5} + \sqrt{13} = 10.314$ (3 dp)

So this triangle comes in between triangles A and B in perimeter.

Now learners can find the perimeters of the remaining triangles D, E and F. They may be able to save time by noticing when a side in one triangle reappears (perhaps in a different orientation or scaled by a certain amount) in another triangle. For example, the $\sqrt{13}$ side in triangle C appears again in triangles D and E.

The answers are given below:

TRIANGLE	PERIMETER
D	$2\sqrt{2} + \sqrt{13} + \sqrt{17} = 10.557$ (3 dp)
E	$\sqrt{5} + \sqrt{13} + \sqrt{26} = 10.941$ (3 dp)
F	$6 + 3\sqrt{2} = 10.243$ (3 dp)

So we have the order $A = F < C < B < D < E$. By calculating, we can see that triangles A and F have *exactly* the same perimeter. We could never know that they were *exactly* the same by measuring.

Some learners may prefer to give their answers in centimetres, since perimeter is a length, but here the squares are just treated as arbitrary units.

carefully, and add up their three measurements for each triangle (perhaps using a calculator). It is very unlikely that they will agree about the order. The error involved in making their measurements is almost certainly going to be greater than the differences in the actual perimeters.

Some learners may think that all the perimeters are the same. If so, you could ask:

Q: Can you be sure that they are *exactly* the same, or are the differences just too small for you to measure?

2 CALCULATING PERIMETERS

Q: How could we work out the perimeter of one of these triangles exactly?

In A, the hypotenuse is $3\sqrt{2}$ and in B it is $2\sqrt{5}$, so the perimeters are:

TRIANGLE	PERIMETER
A	$6 + 3\sqrt{2} = 10.234$ (3 dp)
B	$6 + 2\sqrt{5} = 10.472$ (3 dp)

These values should tally approximately with the measurements that learners

made earlier, but this time they can distinguish that B has a slightly larger perimeter than A, which they probably couldn't determine before.

Learners may be fine now to continue on their own and work out the perimeters of all of the other triangles. However, triangles C-F are harder. In triangle F, one of the sides is clearly 1 unit, and learners might notice that one of the other sides is the same as the hypotenuse in A, but the third side (and many of the sides in the other triangles) needs to be calculated using Pythagoras' theorem. If learners are unsure how to do this, then it could be helpful to do triangle C together:

INFO BAR


+ STRETCH THEM FURTHER

+ CONFIDENT LEARNERS COULD TRY TO INVENT SHAPES THAT CONTAIN PORTIONS OF A *CIRCLE*. FOR EXAMPLE, A QUARTER-CIRCLE COULD BE COMBINED WITH SOME STRAIGHT SIDES TO PRODUCE A MORE COMPLEX SHAPE. THEY COULD TRY TO MAKE THREE SHAPES, EACH INCLUDING AT LEAST ONE ARC OF A CIRCLE, SO THAT EACH SHAPE HAS A (DIFFERENT) TOTAL PERIMETER OF AS NEAR TO 12 AS POSSIBLE.

+ ADDITIONAL RESOURCES

+ IF YOU HAVE GEOBOARDS (OR COULD BUY SOME), THEN THERE ARE MANY INTERESTING TASKS RELATED TO THIS ONE THAT LEARNERS COULD TRY. THERE ARE LOTS OF IDEAS IN *100+ IDEAS FOR TEACHING MATHEMATICS*, BY MIKE OLLERTON (2007, 2ND ED., CONTINUUM), AND IN THE ATM PUBLICATION *USING GEOBOARDS* (1992, ATM), AVAILABLE AT TINYURL.COM/TSGEOBOARD.

+ ABOUT THE EXPERT



Colin Foster is a Senior Research Fellow in the School of Education at the University of Nottingham, and writes books for mathematics teachers (www.foster77.co.uk)

HOME LEARNING
Learners could extend this task by being asked to create three different *quadrilaterals* with different perimeters, but all as near to, say, 12 as possible. As well as drawing the shapes, they should show their calculation of the perimeter for each one.



3 INVENTING TRIANGLES

When learners finish, their task is to draw some more triangles, where each vertex lies on a grid point, that have perimeters as near to these ones as they can. Some trial and error will be

needed. Learners can judge by eye if they think the perimeter will be about right, and then calculate and see where it comes. Who can get the closest to these ones?

SUMMARY

You could conclude the lesson with a plenary in which learners talk about which of the triangles they found easier or harder to calculate, and why. They could also share any created triangles, and other learners could try to find where they fit into the ordering of A to F.